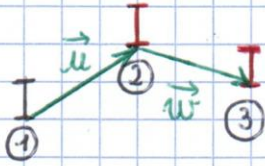
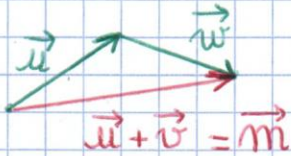


I Julia

1) a) b)

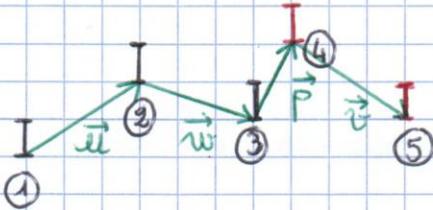


c)

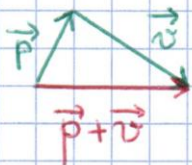


$\vec{u} + \vec{v}$ correspond à \vec{m} .

2) a) b)



c)



$\vec{p} + \vec{v} = \vec{m}$.